

**ATHIYAMAN TEAM**

ONLINE COACHING

**TNPSC, RRB, TN SI, TNTET, RPF****PH: 8681859181****athiyamanteam.com****அதியமான் குழுமம்**

## RPF Constable Previous Year Paper- 2015

1. Which of these states has the longest international border?

- A. Nagaland
- B. Mizoram
- C. Arunachal Pradesh
- D. Assam

**Ans. C**

2. Which of these fabrics is named after a French dress maker?

- A. Linen B. Crepe
- C. Georgette D. Chiffon

**Ans. C**

3. Who was the founder of Sikhism?

- A. Guru Govind Singh
- B. Guru Ramdass
- C. Guru nanak
- D. Ranjeet Singh

**Ans. C**

4. Who is the founder of Patna's famous Super 30 institute that coaches economically back-ward students for IIT JEE?

- A. Anurag Anand B. Sushil Kumar
- C. Anand Kumar D. Nitish Kumar

**Ans. C**

5. Shri Narendra Modi is the \_\_\_\_\_ of India.

- A. Speaker of Lok Sabha
- B. Prime Minister
- C. Leader of Opposition
- D. President

**Ans. B**

6. National Unity Day is celebrated in India on \_\_\_\_\_.

- A. 30th January B. 29th August
- C. 31st October D. 2nd October

**Ans. C**

7. Which continent is the Giraffe native to?

- A. Australia B. Africa
- C. America D. Asia

**Ans. B**

8. Sumo is a traditional form of wrestling of which country?

- A. China B. Japan
- C. Vietnam D. South Korea

**Ans. C**

9. Amir Khusro was the famous poet in the court of \_\_\_\_\_.

**Athiyaman Team Paid Class****TNPSC, RRB, TN SI, TNTET, RPF****Ph: 8681859181 TAKE FREE ONLINE TEST****Join Online Class Now**

- A. Shah Jahan      B. Alauddin Khilji  
C. Akbar            D. Sher Shah Suri

**Ans. B**

10. Which of these medical conditions is classified into Type-1 and Type-2?

- A. Diabetes  
B. Hepatitis  
C. Night Blindness  
D. Common Cold

**Ans. A**

11. Who is the Commander-in-Chief of the Indian Armed Forces?

- A. Prime Minister  
B. Vice-President  
C. Chief of Army Staff  
D. President

**Ans. D**

12. The surface of which of these planets is not solid?

- A. Jupiter B. Mars  
D. mercury

**Ans. A**

13. With which main ingredient is litti, a food item from Bihar, stuffed?

- A. Onion B. Potato  
C. Vegetables D. Gram Flour

**Ans. D**

14. Which natural Phenomenon conducts

carbon dioxide fixation in plants?

- A. Sunlight            B. Rain  
C. Thunder            D. Cosmic Rays

**Ans. A**

15. Other than cricket which game also has a striker?

- A. Ludo            B. Kho - Kho  
C. Carrom        D. Chess

**Ans. C**

16. Islamic State is not waging a battle against

- A. Ukraine B. Lebanon  
C. Iraq D. Syria

**Ans. A**

17. Which of these places got its name from a local word for mangrove trees?

- A. Vrindavan            B. Sunderbans  
C. Mussoorie            D. Madhubani

**Ans. B**

18. Name the Chief Minister of Jharkhand.

- A. Babulal Marandi    B. Arjun Munda  
C. Raghubar Das      D. Hemant Soren

**Ans. C**

19. If you are in Red Fort, which city are you visiting?

- A. Agra            B. Hyderabad  
C. Jaipur            D. Delhi

**Ans. D**

20. Which of these is not a port city on the Arabian Sea?

- A. Panaji            B. Vishakhapatnam



**Athiyaman Team Paid Class**

**TNPSC, RRB, TN SI, TNTET, RPF**

**Ph: 8681859181 TAKE FREE ONLINE TEST**

**Join Online Class Now**

C. Mumbai

D. Mangalore

**Ans. B**

21. Which of these Asian countries is not landlocked?

A. Afghanistan

B. Laos

C. Mongolia

D. Cambodia

**Ans. D**

22. Which was the first hill passenger railway haopened in India in 1881?

A. Kalka Shimla Railway

B. Matheran Hill Railway

C. Nilgiri Mountain Railway

D. Darjeeling Himalayan Railway

**Ans. D**

23. What does CO stand for?

A. Carbon

B. Carbon monoxide

C. Coal

D. Carbon dioxide

**Ans. B**

24. Raslila dance is associated with which God?

A. Lord Shiva

B. Lord Ganesha

C. Lord Indra

D. Lord Krishna

**Ans. D**

25. Which of the following is an Indian online retail company?

A. Alibaba Group

B. Amazon

C. eBay

D. Jabong

**Ans. D**

Directions (26–30): Complete the following series each of which follows a certain pattern.

26. 3, 12, 27, 48, 75, 108, ?

A. 162

B. 183

C. 192

D. 147

**Ans. D**

27. 49, 121, 169, 289, \_\_\_\_\_?

A. 361

B. 529

C. 400

D. 441

**Ans. A**

28. a\_ccabc\_a\_cc\_bcc

A. c b c b

B. b c b a

C. b a c b

D. b b c c

**Ans. B**

29. \_cbacb\_dbad\_adc\_.

A. d a c b

B. b c a a

C. c c a a

D. c b d d

**Ans. A**

30. 2, 3, 4, 6, 8, 12, 16, 24, ? .

A. 36

B. 30

C. 32

D. 40

**Ans. C**

Directions (31-35): In the following questions, find the odd one out.

31. A. Nepal

B. Germany

C. China

D. India

**Ans. B**



**Athiyaman Team Paid Class**

**TNPSC, RRB, TN SI, TNTET, RPF**

**Ph: 8681859181 TAKE FREE ONLINE TEST**

**Join Online Class Now**

32. A. BY B. CV  
C. DW D. AZ

**Ans. B**

33. A. 18 B. 27  
C. 33 D. 9

**Ans. C**

34. A. Snooker B. Chess  
C. Hockey D. Billiards

**Ans. C**

35. A. IFG B. QOP  
C. XVW D. ECD

**Ans. A**

36. 24 : 36 :: ? : 72

- A. 48 B. 60  
C. 56 D. 40

**Ans. A**

37. Convict : Jail :: Lawyer : ?

- A. Field B. Hospital  
C. Office D. Court

**Ans. D**

38. Rabies : Dog :: Ebola : ?

- A. Fish B. Mosquito  
C. Cat D. Bats

**Ans. D**

39. If 26th January, 2015 is Monday what was the day on 26th January, 2011?

- A. Tuesday B. Wednesday  
C. Thursday D. Monday

**Ans. B**

40. If 'a' means multiplication, 'b' means minus, 'c' means plus and 'd' means division, then  $5a\ 3b\ 2c\ [4d\ 4] = ?$ .

- A. 6 B. 0  
C. 14 D. 12

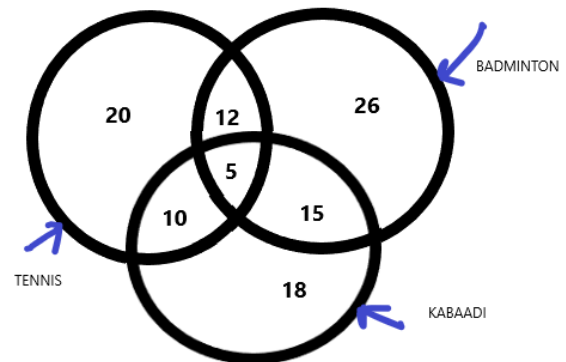
**Ans. C**

41. GTU : JWX :: CMN : ?

- A. FQR B. FPQ  
C. FPR D. FOP

**Ans. B**

Directions (42-45) : The figure given below consists of three intersecting circles which represent set of players who play tennis, badminton and kabaddi. Each region in the figure is represented by a number.



**Athiyaman Team Paid Class**

**TNPSC, RRB, TN SI, TNTET, RPF**

**Ph: 8681859181 TAKE FREE ONLINE TEST**

**Join Online Class Now**



42. How many players play Kabaddi?

- A. 48 B. 28  
C. 38 D. 43

**Ans. A**

43. Which number represents the set of players who play only Tennis?

- A. 20 B. 15  
C. 5 D. 18

**Ans. A**

44. Which number represents the set of players who play both tennis and badminton but not kabaddi?

- A. 10 B. 12  
C. 15 D. 5

**Ans. B**

45. Which game is played by least number of players?

- A. Tennis B. Badminton  
C. Kabaddi D. All the three

**Ans. A**

46. The average of eleven numbers is 30. If average of first ten numbers is 22 then what is the eleventh number?

- A. 8 B. 80  
C. 30 D. 110

**Ans. D**

47. If 59 is added to a square of a number, the result is 900. What is the number?

- A. 30 B. 28  
C. 29 D. 27

**Ans. C**

48. If C is to the West of A and B is to the South of A, in what direction is B with respect to C?

- A. NW B. SE  
C. NE D. SW

**Ans. B**

49. Deepa and Seema together do a work in 6 days. Deepa can complete the same work alone in 9 days. In how many days will Seema complete the work alone?

- A. 18 days B. 3 days  
C. 12 days D. 15 days

**Ans. A**

50. The population of a city was 70,000. It increased by 8%. What is the population now?

- A. 76,000 B. 76,500  
C. 76,600 D. 75,600

**Ans. D**

51. What will be the Highest Common Factor of 4, 8 and 12?

- A. 1 B. 4  
C. 8 D. 2

**Ans. B**



**Athiyaman Team Paid Class**

**TNPSC, RRB, TN SI, TNTET, RPF**

**Ph: 8681859181 TAKE FREE ONLINE TEST**

**Join Online Class Now**

52. If CORRECTION is coded as DPSSFDUJPO, how would EMOTION be coded?

- A. FPNUJPO                      B. FNPUJOP  
C. FNPUJOJ                      D. FNPUJPO

**Ans. D**

53. A motorcycle covers 60 km. in 3 hours. Its speed is doubled. What distance will it cover in the next 1 hour?

- A. 360 km.                      B. 40 km.  
C. 60 km.                      D. 120 km.

**Ans. B**

54. 75 of  $\frac{1}{30} + \frac{1}{2} = ?$

- A. 1.25                      B. 2.5  
C. 12.5                      D. 5

**Ans. D**

55. Ramesh walks 25 metre to wards North. He then turns left and walks for 20 metre. He then again turns left and walks for 25 metre. He then turns left and walks for 50 metre. How far is he from his starting position?

- A. 30 metre                      B. 50 metre  
C. 120 metre                      D. 70 metre

**Ans. A**

56. At what % of simple interest per annum will Rs. 400 amount to Rs. 520 in five years?

- A. 6%                      B. 5%  
C. 5.5%                      D. 24%

**Ans. A**

57. The radius of a circular field is 31.5 metre. What is its circumference?

- A. 198 metre                      B. 154 metre  
C. 237 metre                      D. 110 metre

**Ans. A**

58. The difference of cubes of two consecutive numbers is 127. What are the numbers?

- A. 5 and 6                      B. 4 and 5  
C. 6 and 7                      D. 7 and 8

**Ans. C**

59. The length of a rectangular field is increased by 20% and breadth is decreased by 20%. What is the per cent increase or decrease in its area?

- A. 20% increase                      B. 4% decrease  
C. 1% increase                      D. No change

**Ans. B**

60. Amar is twenty fourth in a queue starting from either end. How many persons are there in the queue?



**Athiyaman Team Paid Class**

**TNPSC, RRB, TN SI, TNTET, RPF**

**Ph: 8681859181 TAKE FREE ONLINE TEST**

**Join Online Class Now**

- A. 46                      B. 49  
C. 47                      D. 48

**Ans. C**

61. Ram moves 10 km towards East then moves 10 km right, again moves 10 km right. In which direction is he now from the starting point?

- A. North                      B. West  
C. South                      D. East

**Ans. C**

62.  $0.0050 \div 0.05 + 0.05 = ?$

- A. 0.15                      B. 0.05  
C. 0.16                      D. 0.50

**Ans. A**

63. A shirt priced at Rs. 1500 is being sold at a discount of 40% + 60%. What is its price after discount?

- A. Rs. 0                      B. Rs. 1400  
C. Rs. 540                      D. Rs. 360

**Ans. D**

64. The sum of two digits of a number is 13. If 9 is subtracted from the number, the digits are interchanged. What is the number?

- A. 76                      B. 87  
C. 78                      D. 67

**Ans. A**

65. The sum of four consecutive positive integers is 82, then the smallest one of them is :

- A. 20                      B. 19  
C. 22                      D. 21

**Ans. B**

66. Raul moves 8 km towards West and then turns towards left and travels for 6 km. How far is Raul from his starting point and in which direction?

- A. NE 2 km                      B. SE 14 km  
C. NW 10 km                      D. SW 10 km

**Ans. D**

67. What is the Lowest Common Multiple of 2, 3 and 7?

- A. 42                      B. 21  
C. 14                      D. 6

**Ans. A**

68. There are 1500 students in a school. 15% are Muslims, 7% Sikhs, 8% Christians and remaining are Hindus. How many Hindu students are there in the school?

- A. 1470                      B. 700  
C. 1050                      D. 1200

**Ans. C**



**Athiyaman Team Paid Class**

**TNPSC, RRB, TN SI, TNTET, RPF**

**Ph: 8681859181 TAKE FREE ONLINE TEST**

**Join Online Class Now**

69. 20 dogs can eat 20 hens in 10 days. In how many days can 40 dogs eat 40 such Hens?

- A. 1                      B. 20  
C. 30                     D. 10

**Ans. D**

70. If BANGLE is coded as ELGNAB. How would SANDAL be coded?

- A. LADNSA                      B. LANDAS  
C. LADNAS                     D. LADANS

**Ans. C**

71. If Wednesday falls on 26th January, then what day will it be on the last day of January?

- A. Friday                      B. Monday  
C. Sunday                     D. Thursday

**Ans. B**

72. 60% is equal to

- A. 6/9                      B. 9/10  
C. 3/5                     D. 7/9

**Ans. C**

73. Average height of a class of 12 students is 180 cm. The average decreases to 179 cm when the height of the class teacher is also added. What is the height of the teacher?

- A. 168 cm                      B. 167 cm  
C. 179.5 cm                     D. 166 cm

**Ans. C**

74.  $3 - 1 + 3 \times 6 + 3 - 1 = ?$

- A. 11                      B. -3  
C. 7                      D. 9

**Ans. C**

75. Rishi earned Rs. 83.2 at compound rate of interest 8% per annum over two years.

How much did he invest?

- A. Rs. 600                      B. Rs. 500  
C. Rs. 540                     D. Rs. 503.2

**Ans. B**

76. If  $\frac{1}{4}$  of third-part of a number is equal to 5, then the number is :

- A. 15                      B. 60  
C. 12                      D. 20

**Ans. B**

77. If  $\times$  stands for division,  $\div$  stands for subtraction,  $+$  stand for multiplication and

$-$  stand for addition, then

$6 \times 2 \div 2 - 4 + 2 = ?$

- A. 0                      B. 4  
C. 10                     D. 9

**Ans. D**



**Athiyaman Team Paid Class**

**TNPSC, RRB, TN SI, TNTET, RPF**

**Ph: 8681859181 TAKE FREE ONLINE TEST**

**Join Online Class Now**



78. In a group of seven teams, each team plays against one another twice. How many total matches will be played in the group?

- A. 49                      B. 42  
C. 48                      D. 28

**Ans. B**

79. A bus travels at a speed of 75 km/hr for 45 minutes and then travels at a speed of 90 km/hr for 45 minutes. What distance will it cover in one and a half hour?

- A. 123.75 km                      B. 165 km  
C. 125 km                          D. 82.5 km

**Ans. A**

80. How many even numbers are there in the following sequence of numbers which are immediately preceded by an odd number but immediately followed by an even number?

5 1 4 7 3 9 8 5 7 2 6 3 1 5 8 6 3 8 5 2 7 4  
3 4 9 6

- A. Two                      B. One  
C. Four                      D. Three

**Ans. A**

81.  $0.105 + 1.05 + 0.515 + 0.015 = ?$

- A. 1.685                      B. 1.675  
C. 1.75                          D. 1.785

**Ans. A**

82. Which is the largest fraction?

- A.  $\frac{3}{4}$                       B.  $\frac{7}{9}$   
C.  $\frac{7}{8}$                       D.  $\frac{9}{10}$

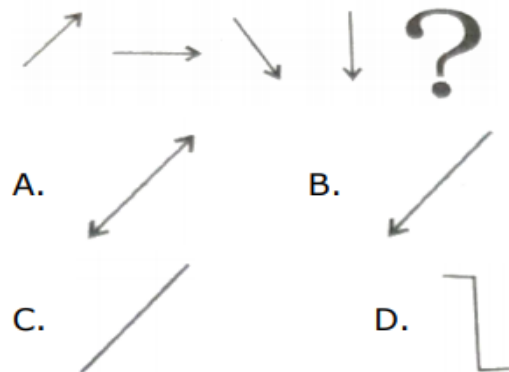
**Ans. D**

83. Average of 8 numbers is 42. If 9 is subtracted from each number then what is the new average?

- A. 33                      B. 34  
C. 25                      D. 9

**Ans. A**

84.



**Ans. B**



**Athiyaman Team Paid Class**

**TNPSC, RRB, TN SI, TNTET, RPF**

**Ph: 8681859181 TAKE FREE ONLINE TEST**

**Join Online Class Now**

85. What is the ratio of 20 paise and Rs. 4?

- A. 1 : 8      B. 1 : 16  
C. 1 : 20      D. 1 : 5

**Ans. C**

86. A shopkeeper sold a shirt for Rs. 728 at a loss of 9%. If he had sold for Rs. 792, what would have been the gain/loss per cent?

- A. 8% loss      B. 9% profit  
C. 1% loss      D. 8% profit

**Ans. A**

87. Convert  $\frac{9}{10}$  into decimal.

- A. 90      B. 1.90  
C. 0.09      D. 0.9

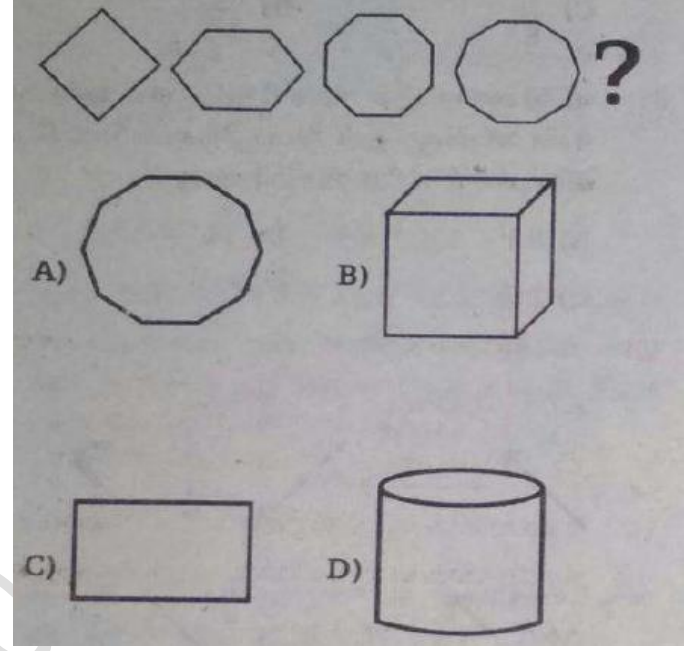
**Ans. D**

88. Shyam sold a bag for Rs. 598.9 at a gain of 13%. What was its cost price?

- A. Rs. 550      B. Rs. 530  
C. Rs. 585      D. Rs. 500

**Ans. B**

89.



**Ans. A**

90. In a certain code SEAT is coded as RDZS. How would READ be coded?

- A. QDZC      B. QDCZ  
C. QDZE      D. QDZD

**Ans. A**

91. What time will a runner take to run a distance of 8 km at a speed of 15 km/hr?

- A. 35 minutes      B. 33 minutes  
C. 31 minutes      D. 32 minutes

**Ans. D**



**Athiyaman Team Paid Class**

**TNPSC, RRB, TN SI, TNTET, RPF**

**Ph: 8681859181 TAKE FREE ONLINE TEST**

**Join Online Class Now**

92. If PERFECTION is coded as EFREPNOITC,  
how will IMPOSTER be coded?

- A. OPIMRETS      B. OPMIRETS  
C. OPMIERTS      D. OPMIREST

**Ans. B**

93. The area of a square field is 196 sq. metre.  
What would be the length of the rope  
required to fence the field from any three  
sides?

- A. 56 metre      B. 42 metre  
C. 52 metre      D. 147 metre

**Ans. B**

94. If 40% of a number is 184, then what is  
the value of 85% of the number?

- A. 333      B. 391  
C. 380      D. 328

**Ans. B**

95. A TV is bought for Rs. 42,000 and sold for  
Rs. 49,140. What is the gain per cent?

- A. 9%      B. 7.14%  
C. 17%      D. 7%

**Ans. C**

96. For making which sweet is winter melon or  
white gourd soaked in sugar syrup?

- A. Jalebi      B. Petha  
C. Gulab Jamun      D. Murabba

**Ans. B**

97. Which of these is an essential component  
of most acids?

- A. Hydrogen      B. Oxygen  
C. Helium      D. Nitrogen

**Ans. A**

98. Sir Creek is a disputed territory between  
India and \_\_\_\_\_.

- A. Myanmar      B. Nepal  
C. Pakistan      D. Bangladesh

**Ans. C**

99. Which of these is essential to keep bones  
strong in the body?

- A. Iodine      B. Zinc  
C. Fats      D. Calcium

**Ans. A**

100. How many different kinds of zodiac signs  
are there in Astrology?

- A. 12      B. 16  
C. 14      D. 11

**Ans. A**



**Athiyaman Team Paid Class**

**TNPSC, RRB, TN SI, TNTET, RPF**

**Ph: 8681859181 TAKE FREE ONLINE TEST**

**Join Online Class Now**

101. The Nobel Peace Prize for 2014 has been awarded to

- A. Kailash Satyarthi
- B. Barack Obama
- C. Kailash Satyarthi and Tawakkul Karman
- D. Kailash Satyarthi and Malala Yousafzai

**Ans. D**

102. The autobiography of which freedom fighter is titled 'Atmakatha' which he wrote during his prison time in Bankipore Jail in Patna?

- A. Rajendra Prasad
- B. Ram Monohar Lohia
- C. Lal Bahadur Shastri
- D. Jayaprakash Narayan

**Ans. A**

103. Which was the first element to be artificially produced?

- A. Technetium
- B. Francium
- C. Einsteinium
- D. Promethium

**Ans. A**

104. Who was the host of TV show 'Big Boss 8'?

- A. Salman Khan
- B. Amitabh Bachchan
- C. Shah Rukh Khan
- D. Amir Khan

**Ans. A**

105. Which of the following is not a social networking website?

- A. Facebook
- B. hi5
- C. Wikipedia
- D. Twitter

**Ans. C**

106. In the Northern Hemisphere, around which date does the summer solstice occur?

- A. 21st June
- B. 22nd July
- C. 23rd May
- D. 31st March

**Ans. A**

107. Which of these fruits is not rich in vitamin C?

- A. Orange
- B. Kiwi
- C. Lemon
- D. Apple

**Ans. D**

108. Deepika Kumari is associated with which sport?

- A. Shooting
- B. Wrestling
- C. Archery
- D. Football

**Ans. C**

109. Which of these countries is an archipelago?

- A. Laos
- B. Chile
- C. Philippines
- D. Argentina

**Ans.**



**Athiyaman Team Paid Class**

**TNPSC, RRB, TN SI, TNTET, RPF**

**Ph: 8681859181 TAKE FREE ONLINE TEST**

**Join Online Class Now**



110. Flight 17, which was shot down over Ukraine was a scheduled international passenger flight to Kuala Lumpur from :  
A. Amsterdam B. Moscow  
C. Paris D. London

**Ans. A**

111. Manik Sarkar is the Chief Minister of  
A. Assam B. Tripura  
C. West Bengal D. Sikkim

**Ans. B**

112. Kaziranga National Park is most famous for :  
A. Swamp Deer  
B. Wild Ass  
C. One-horned Rhinoceros  
D. Asiatic Lion

**Ans. C**

113. Which was the last autonomous territory or protectorate to integrate with the Indian Union?  
A. Puducherry B. Sikkim  
C. Diu D. Goa

**Ans. B**

114. Which country will host the 2016 Summer Olympic Games?  
A. Argentina B. Russia

C. Japan D. Brazil

**Ans. D**

115. Rann of Kutch is situated in which state?

A. Bihar B. Rajasthan  
C. Gujarat D. Maharashtra

**Ans. C**

116. Which new university named after an ancient centre of learning in its vicinity, began its academic session in 2014?

A. Takshila B. Nalanda  
C. Pushpagiri D. Vikramshila

**Ans. B**

117. The sign for which mathematical function is the logo of the Red Cross society?

A. Subtraction B. Multiplication  
C. Division D. Addition

**Ans. D**



**Athiyaman Team Paid Class**

**TNPSC, RRB, TN SI, TNTET, RPF**

**Ph: 8681859181 TAKE FREE ONLINE TEST**

**Join Online Class Now**

118. Who was the ruling Governor General of India when the power was transferred from the East India Company to the British crown?

- A. Lord Irwin                      B. Lord Canning  
C. Lord Curzon                      D. Lord Mountbatten

**Ans. B**

119. Wangchuck dynasty is the ruler of which country?

- A. Brunei                      B. Indonesia  
C. Myanmar                      D. Bhutan

**Ans. D**

120. Which of these Union Cabinet ministers have never served as the Chief Minister of any State or Union territory?

- A. Ram Vilas Paswan  
B. D. V. Sadananda Gowda  
C. Rajnath Singh  
D. Sushma Swaraj

**Ans. A**



***Athiyaman Team Paid Class***

***TNPSC, RRB, TN SI, TNTET, RPF***

**Ph: 8681859181 TAKE FREE ONLINE TEST**

**Join Online Class Now**